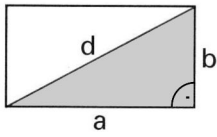
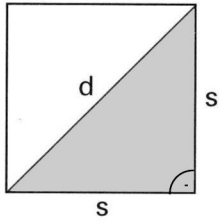


# Satz des Pythagoras : Erste Anwendungen

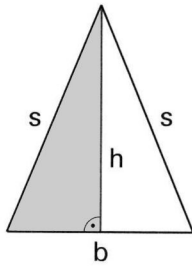
1.  $a = 8\text{cm}$  ,  $b = 5\text{cm}$  ,  $d = ?$



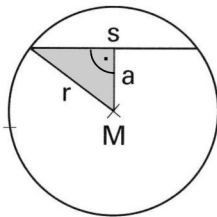
2.  $s = 25\text{cm}$  ,  $d = ?$



3.  $s = 18\text{cm}$  ,  $b = 10\text{cm}$  ,  $h = ?$



4.  $r = 30\text{cm}$  ,  $s = 20\text{cm}$  ,  $a = ?$



5.  $s = 40\text{cm}$  ,  $h = ?$

